

Learning Temple

IIT/NEET ACADEMY

25th Feb. 2021 | Shift - 2
CHEMISTRY

Section -A

1. Given below are two statements :

Statement I :

The identification of Ni^{2+} is carried out by dimethyl glyoxime in the presence of NH_4OH

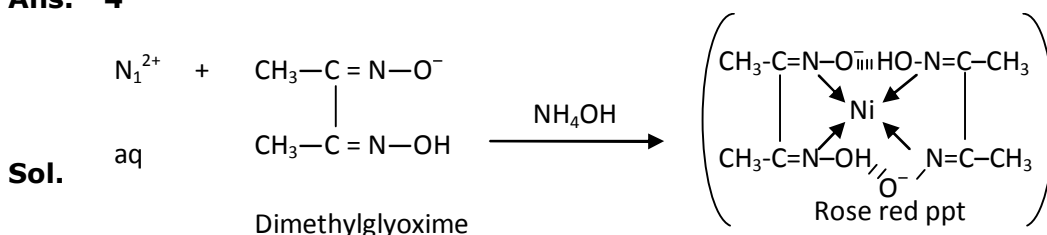
Statement II :

The dimethyl glyoxime is a bidentate neutral ligand.

In the light of the above statements, choose the correct answer from the options given below :

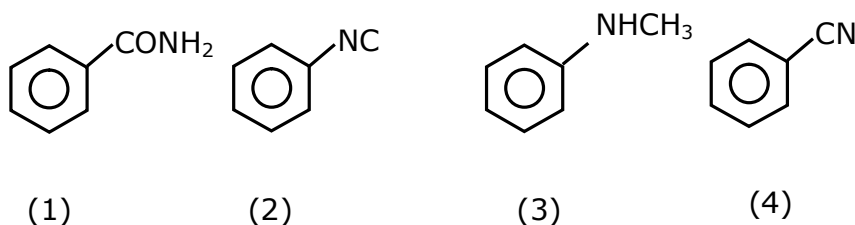
- (1) Both statement I and statement II are true
- (2) Both statement I and statement II are false
- (3) Statement I is false but statement II is true
- (4) Statement I is true but statement II is false

Ans. 4

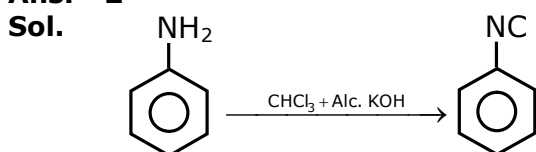


Dimethyl glyoxime is a negative bidentate legend.

2. Carbylamine test is used to detect the presence of primary amino group in an organic compound. Which of the following compound is formed when this test is performed with aniline ?



Ans. 2



3. The correct order of bond dissociation enthalpy of halogen is :

- (1) $\text{F}_2 > \text{Cl}_2 > \text{Br}_2 > \text{I}_2$
- (2) $\text{Cl}_2 > \text{F}_2 > \text{Br}_2 > \text{I}_2$
- (3) $\text{Cl}_2 > \text{Br}_2 > \text{F}_2 > \text{I}_2$
- (4) $\text{I}_2 > \text{Br}_2 > \text{Cl}_2 > \text{F}_2$

Ans. 3

Sol. Fact based

F_2 has $\text{F}-\text{F}$, F_2 involves repulsion of non-bonding electrons & more over its size is small & hence due to high repulsion its bond dissociation energy is very low.

4. Which one of the following statements is FALSE for hydrophilic sols ?

- (1) These sols are reversible in nature
- (2) The sols cannot be easily coagulated
- (3) They do not require electrolytes for stability.
- (4) Their viscosity is of the order of that of H₂O

Ans. 4

Sol. Fact base

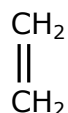
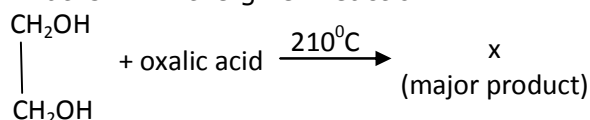
5. Water does not produce CO on reacting with :

- (1) C₃H₈
- (2) C
- (3) CH₄
- (4) CO₂

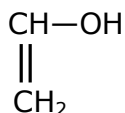
Ans. 4

Sol. H₂O + CO₂ → H₂CO₃

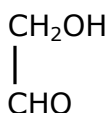
6. What is 'X' in the given reaction ?



(1)



(2)

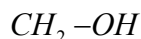


(3)

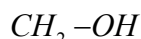


(4)


Ans. 1



Sol. $\begin{array}{c} \text{CH}_2-\text{OH} \\ | \\ \text{CH}_2-\text{OH} \end{array} + \text{oxalic acid} \xrightarrow{210^\circ\text{C}} \text{CH}_2=\text{CH}_2$



7. If which of the following order the given complex ions are arranged correctly with respect to their decreasing spin only magnetic moment ?



(1) (ii) > (i) > (iii) > (iv)

(2) (iii) > (iv) > (ii) > (i)

(3) (ii) > (iii) > (i) > (iv)

(4) (i) > (iii) > (iv) > (ii)

Ans. 4

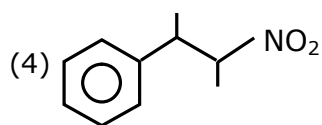
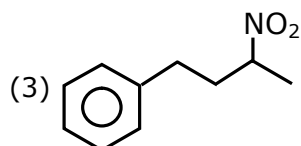
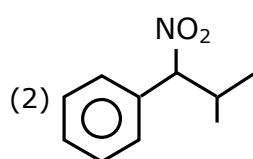
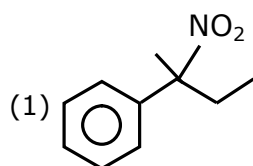
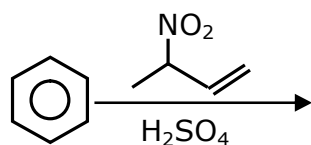
Sol. [FeF₆]³⁻ Fe³⁺ 3d⁵ → 5-unpaired electrons as F⁻ is weak field ligand

[Co(NH₃)₆]³⁺ Co³⁺ 3d⁶ → No-unpaired electron as NH₃ is strong field ligand and causes pairing

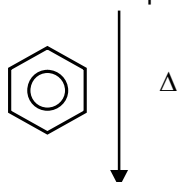
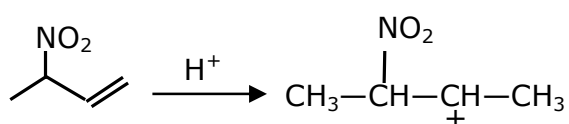
[NiCl₄]²⁻ Ni²⁺ 3d⁸ → 2-unpaired electrons

[Cu(NH₃)₄]²⁺ Cu²⁺ 3d⁹ → 1-unpaired electrons

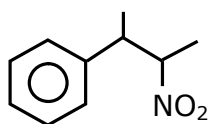
8. The major product of the following reaction is :



Ans. 4



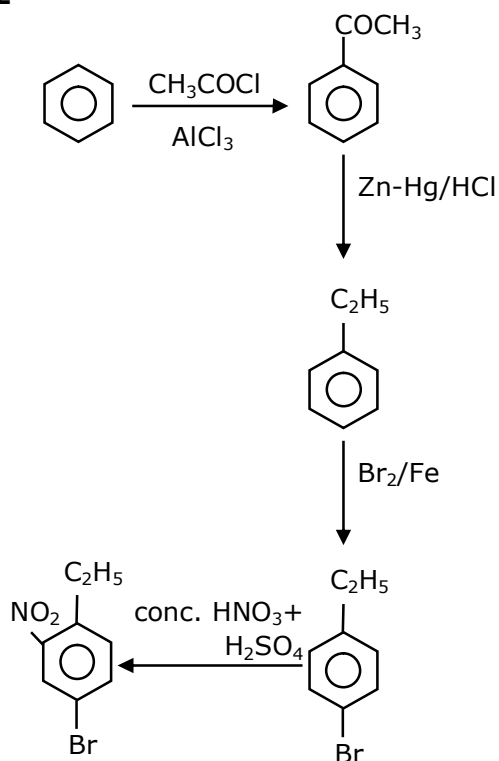
Sol.



9. The correct sequence of reagents used in the preparation of 4-bromo-2-nitroethyl benzene from benzene is :

- (1) $\text{CH}_3\text{COCl}/\text{AlCl}_3$, $\text{Br}_2/\text{AlBr}_3$, $\text{HNO}_3/\text{H}_2\text{SO}_4$, Zn/HCl
- (2) $\text{CH}_3\text{COCl}/\text{AlCl}_3$, $\text{Zn-Hg}/\text{HCl}$, $\text{Br}_2/\text{AlBr}_3$, $\text{HNO}_3/\text{H}_2\text{SO}_4$
- (3) $\text{Br}_2/\text{AlBr}_3$, $\text{CH}_3\text{COCl}/\text{AlCl}_3$, $\text{HNO}_3/\text{H}_2\text{SO}_4$, Zn/HCl
- (4) $\text{HNO}_3/\text{H}_2\text{SO}_4$, $\text{Br}_2/\text{AlCl}_3$, $\text{CH}_3\text{COCl}/\text{AlCl}_3$, $\text{Zn-Hg}/\text{HCl}$

Ans. 2



Sol.

10. The major components of German Silver are :

- (1) Cu, Zn and Ag
- (2) Ge, Cu and Ag
- (3) Zn, Ni and Ag
- (4) Cu, Zn and Ni

Ans. 4

Sol. Fact

German silver is alloy which does not have silver.

Cu-50%; Ni-30%; Zn-20%

11. The method used for the purification of Indium is :

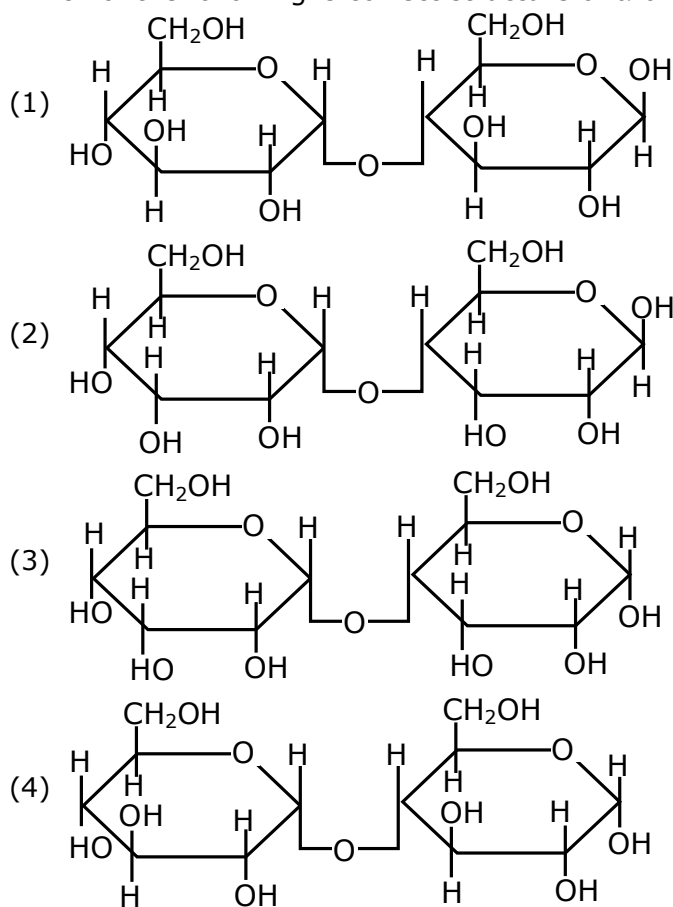
- (1) van Arkel method (2) vapour phase refining
 (3) zone refining (4) Liquation

Ans. 3

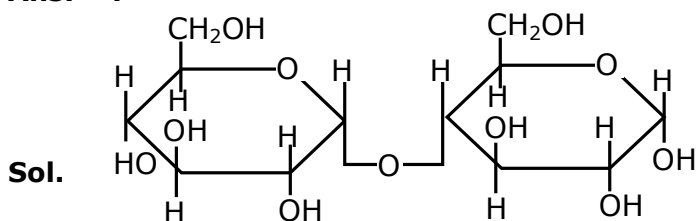
Sol. Fact

Ga, In, Si, Ge are refined by zone refining or vaccume refining.

12. Which of the following is correct structure of α -anomer of maltose :



Ans. 4



[α -Anomer of maltose]

16. Given below are two statements :

Statement I :

α and β forms of sulphur can change reversibly between themselves with slow heating or slow cooling.

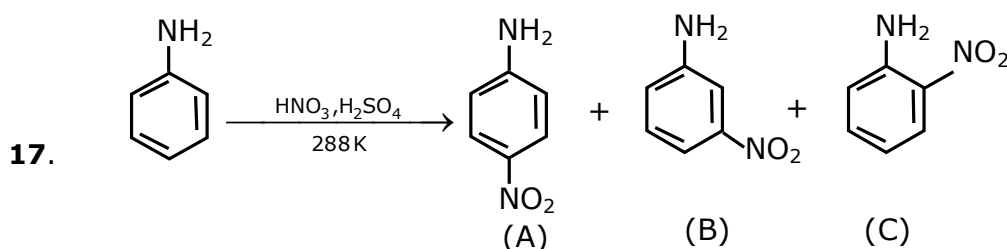
Statement II :

At room temperature the stable crystalline form of sulphur is monoclinic sulphur.

In the light of the above statements, choose the correct answer from the options given below.

- (1) Both statement I and statement II are false
- (2) Statement I is true but statement II is false
- (3) Both statement I and statement II are true
- (4) Statement I is false but statement II is true

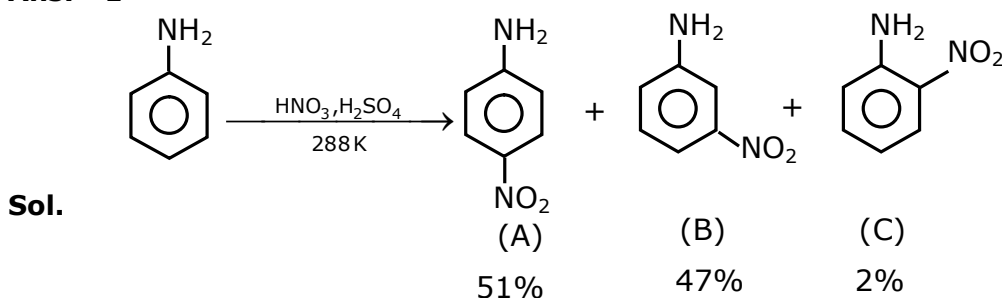
Ans. 2



Correct statement about the given chemical reaction is :

- (1) Reaction is possible and compound (A) will be major product.
- (2) The reaction will form sulphonated product instead of nitration.
- (3) $-NH_2$ group is ortho and para directive, so product (B) is not possible.
- (4) Reaction is possible and compound (B) will be the major product.

Ans. 1



18. Which of the following compound is added to the sodium extract before addition of silver nitrate for testing of halogens ?

- (1) Nitric acid (2) Sodium hydroxide
(3) Hydrochloric acid (4) Ammonia

Ans. 1

Sol. $NaCN + HNO_3 \rightarrow NaNO_3 + HCN \uparrow$

$Na_2S + HNO_3 \rightarrow NaNO_3 + H_2S \uparrow$

Nitric acid decomposed NaCN & Na₂S, else they precipitate in test & misquote the result

19. Given below are two statements :

Statement I :

The pH of rain water is normally ~5.6.

Statement II :

If the pH of rain water drops below 5.6, it is called acid rain.

In the light of the above statements, choose the correct answer from the option given below.

- (1) Statement I is false but Statement II is true
(2) Both statement I and statement II are true
(3) Both statement I and statement II are false
(4) Statement I is true but statement II is false

Ans. 2

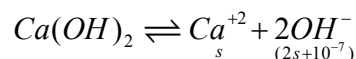
Sol. Both statements are correct

20. The solubility of Ca(OH)₂ in water is :

[Given : The solubility product of Ca(OH)₂ in water = 5.5×10^{-6}]

- (1) 1.11×10^{-6} (2) 1.77×10^{-6}
(3) 1.77×10^{-2} (4) 1.11×10^{-2}

Ans. 4



$$s(2s+10^{-7})^2 = 5.5 \times 10^{-6}$$

$$4s^3 = 5.5 \times 10^{-6}$$

$$s^3 = \frac{5500}{4} \times 10^{-9}$$

$$s = \left(\frac{2250}{2} \right)^{1/3} \times 10^{-3}$$

$$s = (1125)^{1/3} \times 10^{-3}$$

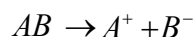
$$s = 1.11 \times 10^{-2}$$

Section -B

1. If a compound AB dissociates to the extent of 75% in an aqueous solution, the molality of the solution which shows a 2.5 K rise in the boiling point of the solution is _____ molal.
(Rounded-off to the nearest integer)

$$[K_b = 0.52 \text{ K kg mol}^{-1}]$$

Ans. 3



$$1 - \alpha \quad \alpha \quad \alpha$$

$$\alpha = 3/4$$

$$N = 2$$

$$i = [1 + (2-1)\alpha]$$

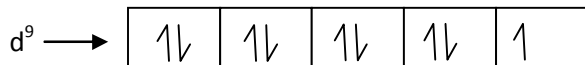
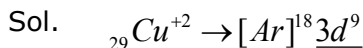
$$2.5 = [1 + (2-1)3/4] \times 0.52 \times m$$

$$m = \frac{2.5}{0.52 \times 7/4} = \frac{10}{3.64} = 2.747$$

$$m = 2.747 \approx 3 \text{ mol/kg}$$

2. The spin only magnetic moment of a divalent ion in aqueous solution (atomic number 29) is _____ BM.

Ans. 2



No. of unpaired $e^- = 1$

$$\text{Magnetic moment} = \mu = \sqrt{n(n+2)}$$

$$\mu = \sqrt{(1)(1+2)} = \sqrt{3} \text{ B.M.}$$

$$= 1.73 \text{ Ans.}$$

3. The number of compound/s given below which contain/s $-\text{COOH}$ group is _____.

(1) Sulphanilic acid

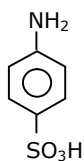
(2) Picric acid

(3) Aspirin

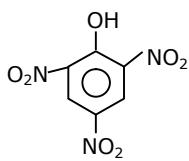
(4) Ascorbic acid

Ans. 1

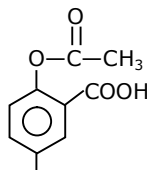
Sol.



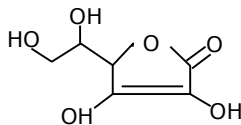
(A)



(B)



(C)



(D)

4. The unit cell of copper corresponds to a face centered cube of edge length 3.596 Å with one copper atom at each lattice point. The calculated density of copper in kg/m³ is _____.
[Molar mass of Cu : 63.54 g; Avogadro number = 6.022×10²³]

Ans. 9077

Sol. a = 3.596 Å

$$d = \frac{Z \times GMM}{N_A \times a^3}$$

$$d = \frac{4 \times 63.54 \times 10^{-3}}{6.022 \times 10^{23} \times (3.596 \times 10^{-10})^3}$$

$$d = 0.9076 \times 10^4 = 9076.2 \text{ kg/m}^3$$

5. Consider titration of NaOH solution versus 1.25 M oxalic acid solution. At the end point following burette readings were obtained.

(i) 4.5 ml. (ii) 4.5 ml. (iii) 4.4 ml. (iv) 4.4 ml (v) 4.4 ml

If the volume of oxalic acid taken was 10.0 ml. then the molarity of the NaOH solution is ____M. (Rounded-off to the nearest integer)

Ans. 6

Eq. of NaOH = Eq. of oxalic acid

$$[\text{NaOH}] \times 1 \times 4.4 = \frac{5}{4} \times 2 \times 10$$

$$[\text{NaOH}] = \frac{100}{4 \times 4.4} = \frac{25}{4.4} = 5.68$$

Nearest integer = 6M Ans.

6. Electromagnetic radiation of wavelength 663 nm is just sufficient to ionize the atom of metal A. The ionization energy of metal A in kJ mol⁻¹ is _____. (Rounded off to the nearest integer)
[h=6.63×10⁻³⁴J s, c = 3.00×10⁸ms⁻¹, N_A=6.02×10²³ mol⁻¹]

Ans. 180

Sol. Energy req. to ionize an atom of metal 'A' = $\frac{hc}{\lambda} = \frac{hc}{663nm}$

for 1 mole atoms of 'A'

$$\text{Total energy required} = N_A \times \frac{hc}{\lambda}$$

$$= \frac{6.023 \times 10^{23} \times 6.63 \times 10^{-34} \times 3 \times 10^8}{663 \times 10^{-9}}$$

$$= 6.023 \times 3 \times 10^{23-34+8+7}$$

$$= 18.04 \times 10^4 \text{ J/mol}$$

$$= 180.4 \text{ KJ/mol}$$

Nearest Integer = 180 KJ/Mol.

7. The rate constant of a reaction increases by five times on increase in temperature from 27^o C to 52^oC. The value of activation energy in kJ mol⁻¹ is _____. (Rounded off to the nearest integer)
[R=8.314 J K⁻¹ mol⁻¹]

Ans. 52

$$\frac{K_{52^{\circ}C}}{K_{27^{\circ}C}} = 5$$

$$\ln \left\{ \frac{k_{T_2}}{k_{T_1}} \right\} = \frac{E_a}{R} \left\{ \frac{1}{T_1} - \frac{1}{T_2} \right\}$$

$$\ln(5) = \frac{E_a}{R} \left\{ \frac{1}{300} - \frac{1}{325} \right\}$$

$$\frac{2.303 \times 0.7 \times 8.314 \times 300 \times 325}{25} = E_a$$

$$E_a = 51524.96 \text{ J/mol}$$

$$E_a = 51.524 \text{ KJ/mol}$$

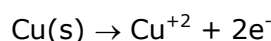
52 Ans.

8. Copper reduces NO_3^- into NO and NO_2 depending upon the concentration of HNO_3 in solution. (Assuming fixed $[Cu^{2+}]$ and $P_{NO}=P_{NO_2}$), the HNO_3 concentration at which the thermodynamic tendency for reduction of NO_3^- into NO and NO_2 by copper is same is 10^x M. The value of 2x is _____. (Rounded-off to the nearest integer)

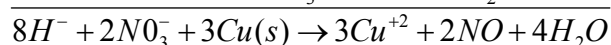
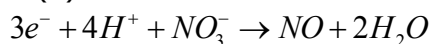
[Given : $E_{Cu^{2+}/Cu}^0 = 0.34V, E_{NO_3^-/NO}^0 = 0.96V, E_{NO_3^-/NO_2}^0 = 0.79V$ and at 298 K, $\frac{RT}{F}(2.303) = 0.059$]

Ans. 1

Sol. Anode



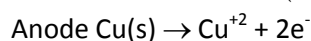
Cathode (1)

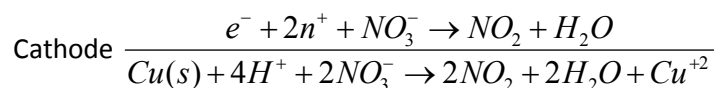


$$Q = \frac{[Cu^{+2}]^3 \times (p_{NO})^2}{[NO_3^-]^2 [H^+]^8}$$

$$E_{cell}^0 = 1.3$$

$$E_{cell} = 1.3 - \frac{0.059}{6} \log \frac{(Cu^{+2})^3 (p_{NO})^2}{(NO_3^-)^2 \times (H^+)^8} \quad \dots(1)$$





$$\epsilon_{cell}^0 = 1.13$$

$$Q = \frac{(Cu^{+2})(p_{NO_2})^2}{(NO_3^-)^2 (H^+)^4}$$

$$\epsilon_{cell} = 1.13 - \frac{0.059}{2} \log \frac{(Cu^{+2})(p_{NO_2})^2}{(NO_3^-)^2 (H^+)^4}$$

$$\epsilon_{cell_1} = \epsilon_{cell_2}$$

$$1.3 - \frac{0.059}{6} \log(Q_1) = 1.13 - \frac{0.059}{2} \log(Q_2)$$

$$0.17 = \frac{0.059}{6} \{ \log(Q_1) - 3 \log(Q_2) \}$$

$$= \frac{0.059}{6} \left\{ \log \frac{(Cu^{+2})^3 \times (p_{NO})^2 \times (NO_3^-)^6 (H^+)^{12}}{(NO_3^-)^2 (H^+)^8 \times (Cu^{+2})^3 \times (p_{NO_2})^6} \right\}$$

$$= \frac{0.059}{6} \left\{ \log \frac{[NO_3^-]^4 [H^+]^4}{(P_{NO_2})^4} \right\}$$

$$0.17 = \frac{0.059}{6} \times 8 \log(HNO_3)$$

$$\log(HNO_3) = 2.16$$

$$[HNO_3] = 10^{2.16} = 10^x$$

$$x = 2.16 \Rightarrow 2x = 4.32 \approx 4$$

9. Five moles of an ideal gas at 293 K is expanded isothermally from an initial pressure of 2.1 MPa to 1.3 MPa against a constant external 4.3 MPa. The heat transferred in this process is ____ kJ mol⁻¹. (Rounded-off to the nearest integer)

[Use R = 8.314 J mol⁻¹ K⁻¹]

Ans. 15

Sol. Moles (n) = 5

$$T = 293 \text{ K}$$

Process = IsoT. → Irreversible

$$P_{\text{ini}} = 2.1 \text{ MPa}$$

$$P_{\text{t}} = 1.3 \text{ MPa}$$

$$P_{\text{ext}} = 4.3 \text{ mPa}$$

$$\text{Work} = - P_{\text{ext}} \Delta V$$

$$= -4.3 \times \left(\frac{5 \times 293R}{1.3} - \frac{5 \times 293}{2.1} \right)$$

$$= -5 \times 293 \times 8.314 \times 43 \left(\frac{1}{13} - \frac{1}{21} \right)$$

$$= \frac{5 \times 293 \times 8.314 \times 43 \times 8}{21 \times 13}$$

$$= -15347.7049 \text{ J}$$

$$= -15.34 \text{ KJ}$$

Isothermal process, so $\Delta U = 0$

$$w = -Q$$

$$Q = 15.34 \text{ KJ / mol}$$

So answer is 15

10. Among the following, number of metal/s which can be used as electrodes in the photoelectric cell is _____. (Integer answer).

(A) Li

(B) Na

(C) Rb

(D) Cs

Ans. 1

Sol. Cs is used in photoelectric cell due to its very low ionization potential.